


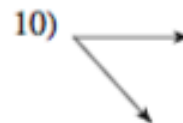
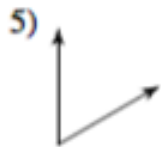
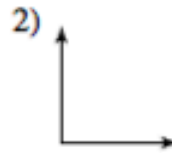
ASSIGNMENT #12: Classifying Triangles

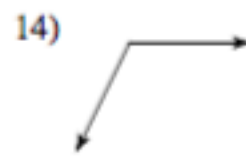
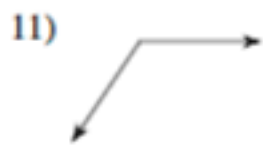
Name: _____ Period: _____ Date: _____



Identify if the angles are acute, obtuse, straight, or right.

Score: /10





15) 16°

16) 180°

17) 90°

18) 97°

19) 59°

20) 39°

21) 119°

22) 82°

23) 162°

24) 52°

25) 15°

26) 116°